

RECTA NUMERICA

Desarrollo la suma en la recta



$$5 + 2 =$$



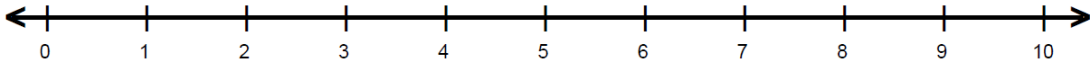
$$3 + 3 =$$



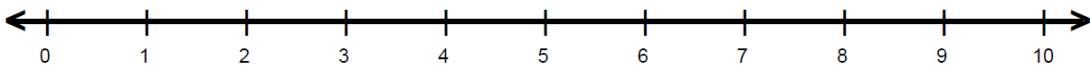
$$2 + 4 =$$

RECTA NUMÉRICA

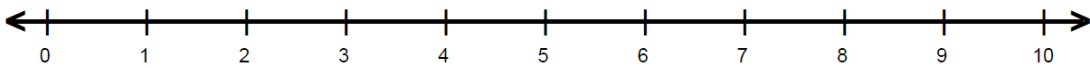
• Desarrollo la resta en la recta.



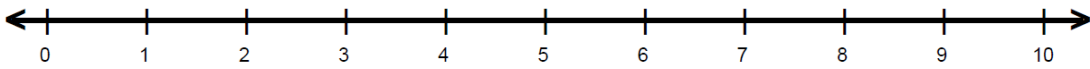
$8 - 1 = \underline{\quad}$



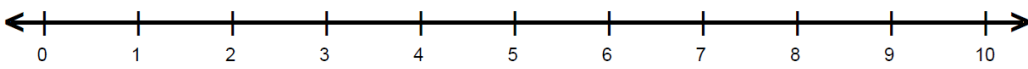
$9 - 1 = \underline{\quad}$



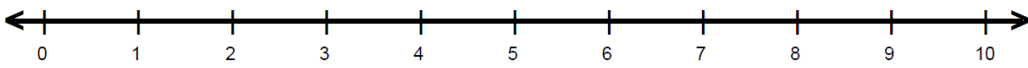
$8 - 1 = \underline{\quad}$



$9 - 1 = \underline{\quad}$



$8 - 1 = \underline{\quad}$



$9 - 1 = \underline{\quad}$