



**TRAZO DE TRIANGULOS**

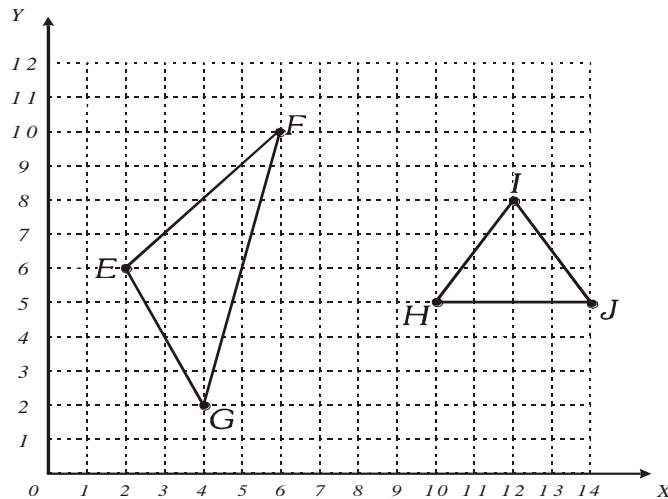


Los triángulos son figuras geométricas de 3 lados

Ejemplo:

      
*EFG*  
 $E = (2 ; 6)$   
 $F = (6 ; 10)$   
 $G = (4 ; 2)$

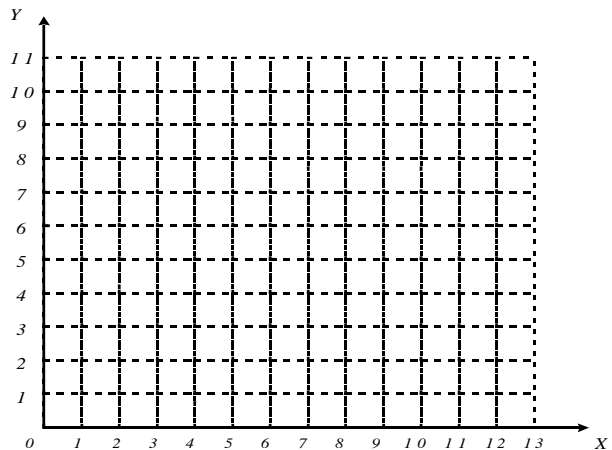
      
*HIJ*  
 $H = (10 ; 5)$   
 $I = (12 ; 8)$   
 $J = (14 ; 5)$



**AHORA HAZLO TÚ**

Traza y colorea los triángulos:

<u>    </u> <i>ABC</i>	<u>    </u> <i>PQR</i>
$A = (8 ; 1)$	$P = (1 ; 1)$
$B = (11 ; 10)$	$Q = (1 ; 9)$
$C = (12 ; 12)$	$R = (4 ; 10)$

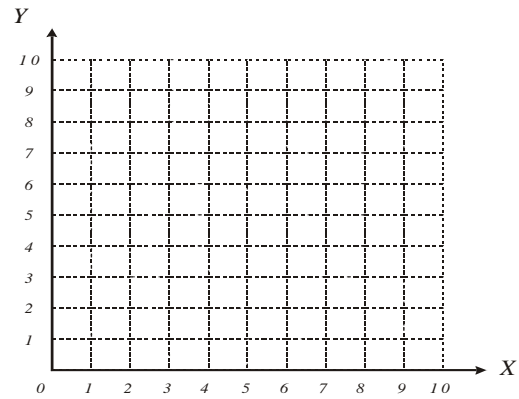


## PRACTIQUEMOS

Traza y colorea los siguientes triángulos.

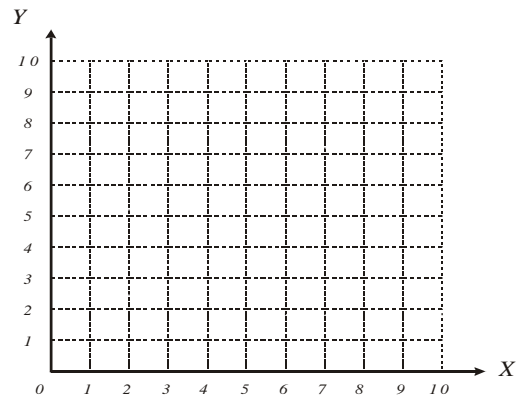
1.

$$\begin{array}{c} \underline{ABC} \\ A = (2 ; 2) \\ B = (8 ; 2) \\ C = (8 ; 8) \end{array}$$



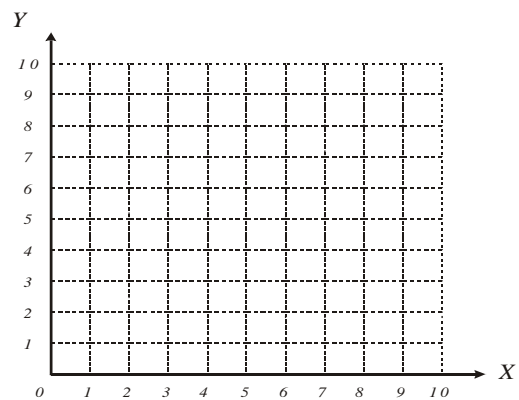
2.

$$\begin{array}{c} \underline{MNP} \\ M = (1 ; 3) \\ N = (6 ; 0) \\ P = (9 ; 7) \end{array}$$



3.

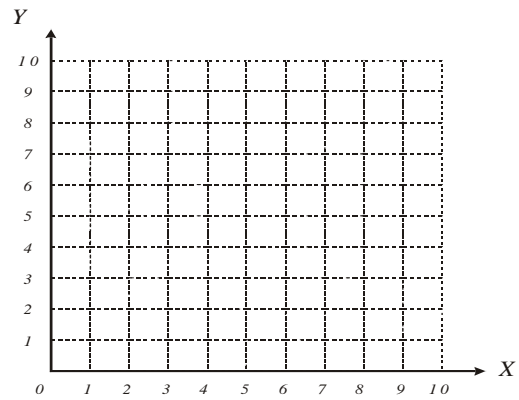
$$\begin{array}{c} \underline{RST} \\ R = (1 ; 9) \\ S = (4 ; 5) \\ T = (9 ; 9) \end{array}$$



# CIRCULO EDUCATIVO

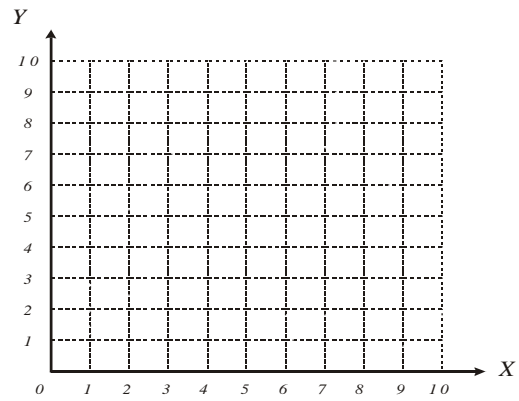
4.

$$\begin{array}{c} \underline{LST} \\ L = (6 ; 2) \\ S = (5 ; 1) \\ T = (10 ; 10) \end{array}$$



5.

$$\begin{array}{c} \underline{DEF} \\ D = (4 ; 3) \\ E = (7 ; 9) \\ F = (8 ; 1) \end{array}$$



## TAREITA

Traza

$$P = (2; 0)$$

$$Q = (0; 3)$$

$$T = (3; 8)$$

$$F = (7; 7)$$

$$G = (8; 1)$$

$$H = (5; 0)$$

